

Kindergarten Summer Homework Packet

Name: _____

Entering First Grade



Monday


Write the missing beginning letter



_ o g



_ e b r a




_ i s h



_ a r



_ i o n



_ u n

Tuesday

Write numbers from 0-20


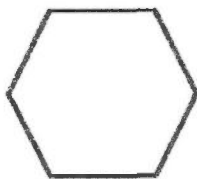





Wednesday

Write uppercase letters from A-Z

A				E		
	I					
O						U

Thursday

Label the Shapes



Word Bank

Rectangle

Circle


Square

Triangle

Hexagon

Monday

Count by 10's



Tuesday

Write words for the word families

_at	_an	_ap	_ad
-----	-----	-----	-----

_____	_____	_____	_____
_____	_____	_____	_____
_____	_____	_____	_____
_____	_____	_____	_____

Wednesday

Circle the number that is greater

4

10

5

11

8

2

15

12

0

9

20

13

1

3

17

18

7

6

19


16

Thursday

Circle the number of syllables



1 2 3



1 2 3



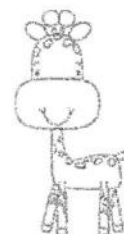
1 2 3



1 2 3



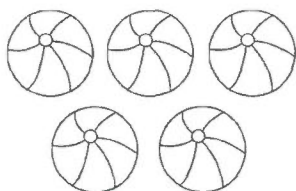
1 2 3




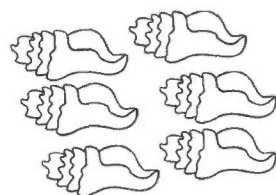
1 2 3

Friday


Count the objects and write the number.

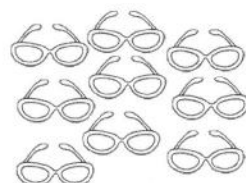












Friday

Change the first letter to make a new word.



mouse



bug



hen



_ ouse



_ ug

10

_ en



frog



fox



hat



_ og



_ ox



_ at

Wednesday

Fill in the blank using the words from the word bank.

_____ you have _____ toy?

Will _____ play _____ me?

I got a gift _____ you.

I _____ to play at _____ park.

Word Bank

my

with

want

Will

for

you

the

Thursday

Practice counting to 100 today.



I counted by 1's



I counted by 10's



I counted by 5's

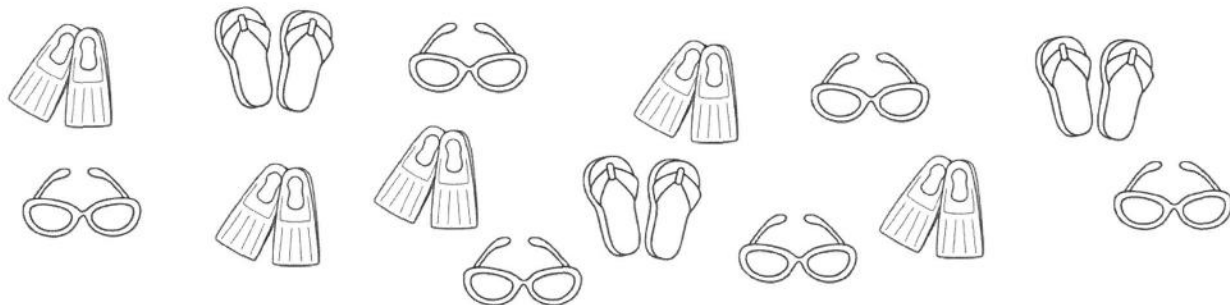
Monday

Write lowercase letters from a-z

		c				
					m	
	p					
		w				

Tuesday

Complete the graph.



Which has the most?



Which has the least?



Wednesday

Edit the sentences.

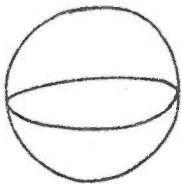
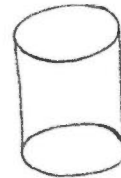
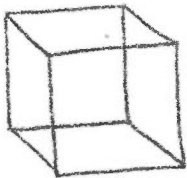
i love summer

will you play with me

i like ice cream

Thursday

Name the shapes.



Word Bank

cone





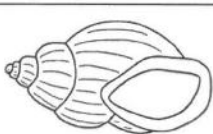
cylinder

cube

sphere

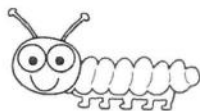

Monday

Circle the correct spelling.


	bog	odg	dog	ogb	gob
	ifsh	sfih	hisf	fish	fihs
	swing	wsing	sinwg	gniws	nisgw
	barc	arcb	crab	brca	carb
	Helsl	shell	llesh	shlel	elshl

Tuesday

Circle the object that would be heavier.



Circle the object that would be lighter.



Monday


Write the missing ending letter.



do _



po _




cr a _



ja _




sn ai _




su _

Tuesday


Write the equation to match the picture.



___ + ___ = ___



___ + ___ = ___



___ + ___ = ___



___ + ___ = ___

Wednesday

Write the words in the word bank under the matching vowel.

a

e

i

o

u

Word Bank

cat pot bib get mud
den pig man dug rod

Thursday

Write the different equations to make the number in the box.

3

____ + ____ = 3

____ + ____ = 3

____ + ____ = 3

4

____ + ____ = 4

____ + ____ = 4

____ + ____ = 4

____ + ____ = 4

____ + ____ = 4

5

____ + ____ = 5

____ + ____ = 5

____ + ____ = 5

____ + ____ = 5

____ + ____ = 5


____ + ____ = 5

Monday

Write upper and lowercase letters from a-z.

Tuesday

Write and solve the subtraction problems.



$$\underline{\quad} - \underline{\quad} = \underline{\quad}$$



$$\underline{\quad} - \underline{\quad} = \underline{\quad}$$



$$\underline{\quad} - \underline{\quad} = \underline{\quad}$$



$$\underline{\quad} - \underline{\quad} = \underline{\quad}$$



$$\underline{\quad} - \underline{\quad} = \underline{\quad}$$

Wednesday

Re-write the sentence with the correct punctuation.

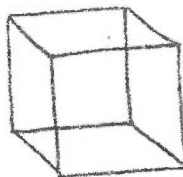

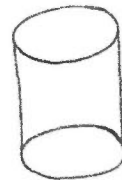
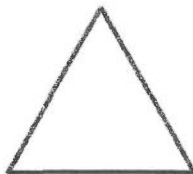
I love summer

Will you play with me

I like ice cream

Thursday

Is the shape flat or 3-D?



Monday

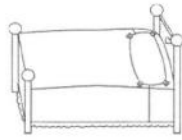
Write the missing middle letter.




c _ _ t



d _ _ g




b _ _ d



f _ _ sh



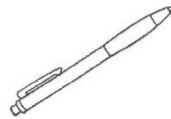
b _ _ g



p _ _ g




m _ _ g



p _ _ n



fr _ _ g



cr _ _ b

Tuesday

Draw a picture with rods and units and write the equation.

12

___ + ___ = ___

17

___ + ___ = ___

15

___ + ___ = ___

13

___ + ___ = ___

19

___ + ___ = ___

Wednesday

Write a complete sentence and draw a picture about:

What do you like about summer?

Thursday





Draw a picture and solve the word problems.

If Kim has 4 apples and gets 2 more, how many does she have in all?

If Rob has 5 cookies and gives 2 to his friends, how many does he have left?

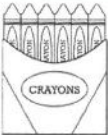




Monday






Draw and write the number to show how many.

hearts	   	4
flowers		
circles		
X's		

Tuesday

Count the syllables in each word and write the number.

Wednesday


How Many:

Color triangles  green

Color squares  blue

Color rectangles  red

Color circles  yellow



How many triangles?

How many circles?

How many squares?

How many rectangles?

Thursday


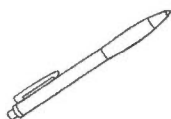





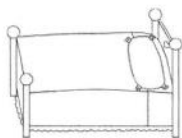
Draw a picture and solve the word problems.

If I took a walk in the park and saw 3 birds in a tree and 4 birds on the pond, how many birds did I see?

If Tami made 10 cookies and ate 2, how many cookies did she have left?

Monday

Circle the pictures from the _at family.



Tuesday

Write the number needed to make 10. Color the boxes if needed.

Example: $3 + \underline{7} = 10$

--	--	--	--	--	--	--	--	--	--

$3 + \underline{\quad} = 10$

--	--	--	--	--	--	--	--	--	--

$0 + \underline{\quad} = 10$

--	--	--	--	--	--	--	--	--	--

$5 + \underline{\quad} = 10$

--	--	--	--	--	--	--	--	--	--

$7 + \underline{\quad} = 10$

--	--	--	--	--	--	--	--	--	--

$1 + \underline{\quad} = 10$

--	--	--	--	--	--	--	--	--	--

Wednesday

Write a complete sentence and draw a picture about:

What do you think you will like best about first grade?

Thursday

Color "thumbs up" if the equation is true or
"thumbs down" if the equation is false.



$$2+3=4$$



$$5+0=5$$



$$1+3=4$$



$$2+1=2$$






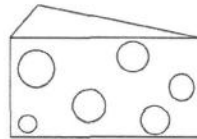
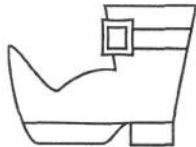

$$3+2=4$$



$$0+2=2$$

Monday

Circle words that begin with /sh/. Underline words that begin with /ch/.



Tuesday


Use the pictures to help you solve the subtraction problems.



$$5 - 4 = \square$$



$$3 - 1 = \square$$



$$4 - 0 = \square$$

Monday

Write 5 or more words that rhyme with hat.



A large, empty rectangular box with rounded corners, intended for writing words that rhyme with 'hat'.

Tuesday

Count forward.

10

4

0

5

Friday

Write the missing middle letter.

b _ t



d _ g




b _ s



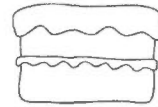
ch _ ck



f _ sh



c _ ke



m _ p

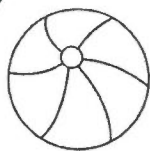


c _ t




Friday


Draw a line from the word to the matching picture.



crab



sun



ball



lion




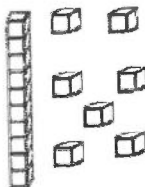

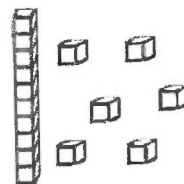
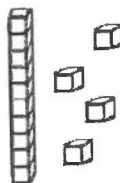
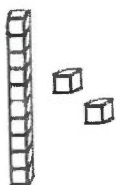
dog



zebra

Thursday

Write the number that matches the picture.



Created by Smart Kinder Cookies ©2013